

Homework Assignment V

Reading Assignment: Kuc Chapter 4 and Kerns-Irwin Chapter 13

1. Consider a modified SR-FF as depicted in the figure below.

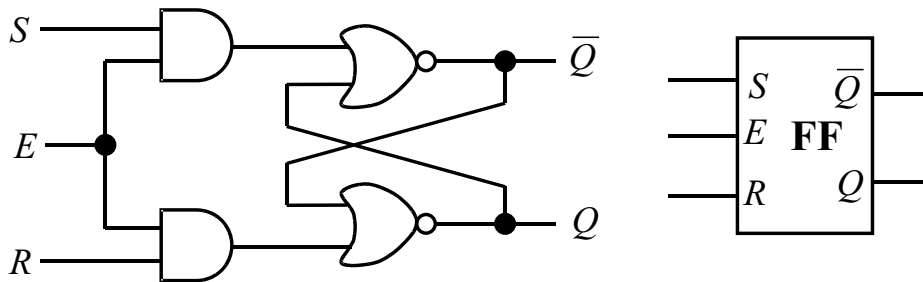


Figure 1: The modified Set-Reset Flip-Flop.

- (a) Sketch a typical set of timing diagrams that can demonstrate the operational behavior of the flip-flop. Describe the difference between this modified SR-FF and the original one described in lecture.
- (b) Draw the finite state machine for the modified SR-FF.
- (c) Figure 2 shows another extension of the SR-FF, called the *data latch*. Sketch the timing diagram for the output Q of the data latch given that $Q = 1$ initially.

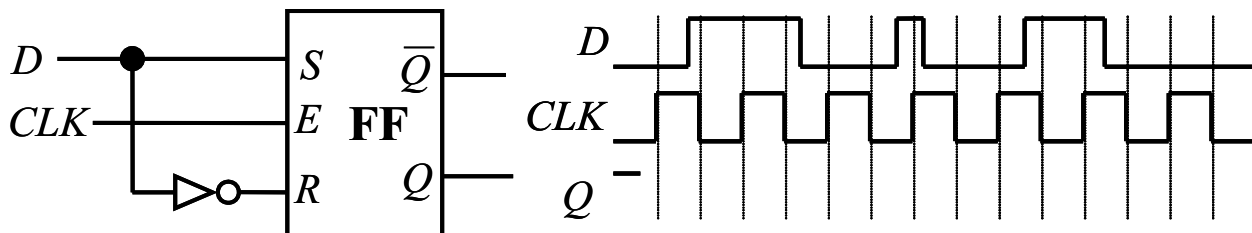


Figure 2: The data latch.

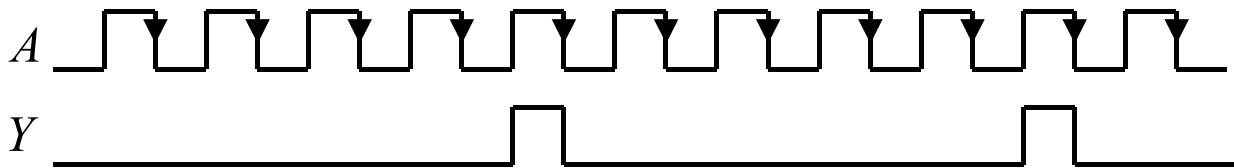


Figure 3: The output Y of the circuit to be designed.

2. Assume that you have an unlimited supply of inverters, AND gates, OR gates, and the toggle flip-flops (T-FF) where the output T responds to the falling edge of its input A . Construct a sequential circuit that outputs a pulse for every 5 pulses of A as illustrated in Figure 3.
3. The stock room has an ample supply of basic gates and toggle flip-flops.
 - (a) Design a 2-bit modulo-4 counter that counts **backward**. Suppose that your counter's initial display is 3 in decimal, it should show $3 \rightarrow 2 \rightarrow 1 \rightarrow 0 \rightarrow 3 \rightarrow 2 \rightarrow 1 \rightarrow 0 \rightarrow 3 \rightarrow 2 \dots$
 - (b) Sketch the finite state machine describing the operation of your reverse counter in Part (a). *Hint: You may need more than two states here!*
 - (c) We would like to add another input signal labeled *RESET* to clear the display of the counter to 11 whenever it is activated. Draw the modified counter circuit with the additional *RESET* input.
4. Consider the *JK flip-flop* with inputs $\{J, K, CLK\}$ and outputs $\{Q, \overline{Q}\}$, operating according to the following rules:
 - When both J and K are low, the flip-flop stays put (no change at output Q).
 - When $J = 0$ and $K = 1$, the flip-flop resets ($Q = 0$).
 - When $J = 1$ and $K = 0$, the flip-flop sets ($Q = 1$).
 - When both J and K are high, the flip-flop will toggle its output Q at every falling edge of the clock input.
 - (a) Show how to use the JK flip-flops to design a Modulo-8 counter.
 - (b) Draw timing diagrams of your counter's outputs $\{Q_2, Q_1, Q_0\}$ along with a clock CLK signal to demonstrate its operations.
 - (c) Draw the finite state machine for your Modulo-8 counter.
 - (d) Design a Modulo-6 counter, again using the JK flip-flops and basic gates.
 - (e) Can we use the JK flip-flops as memory cells to store binary data? Justify why or why not.

Due date: **October 24** in class